




**Rock Cycle Cut & Paste**



**Metamorphic rock**

**Igneous Rock**

**Sedimentary rock**

**Sediment**

**Magma**

**Heat and Pressure**

**Heat and Pressure**

**Cementing and Compacting**

**Melting**

**Melting**

**Melting**

**Weathering and Erosion**

**Cooling**

**Weathering and Erosion**

**Weathering and Erosion**

	1	2	3	4
Geo 2	I can create a diagram of the rock cycle that shows how rocks are transformed between the 3 major types		I can create a diagram of the rock cycle that includes connections to weathering & erosion, and Earth's hot interior.	Not Assessed in this assignment

